

# Primary School Interview

## Workbook



Answer the following questions.

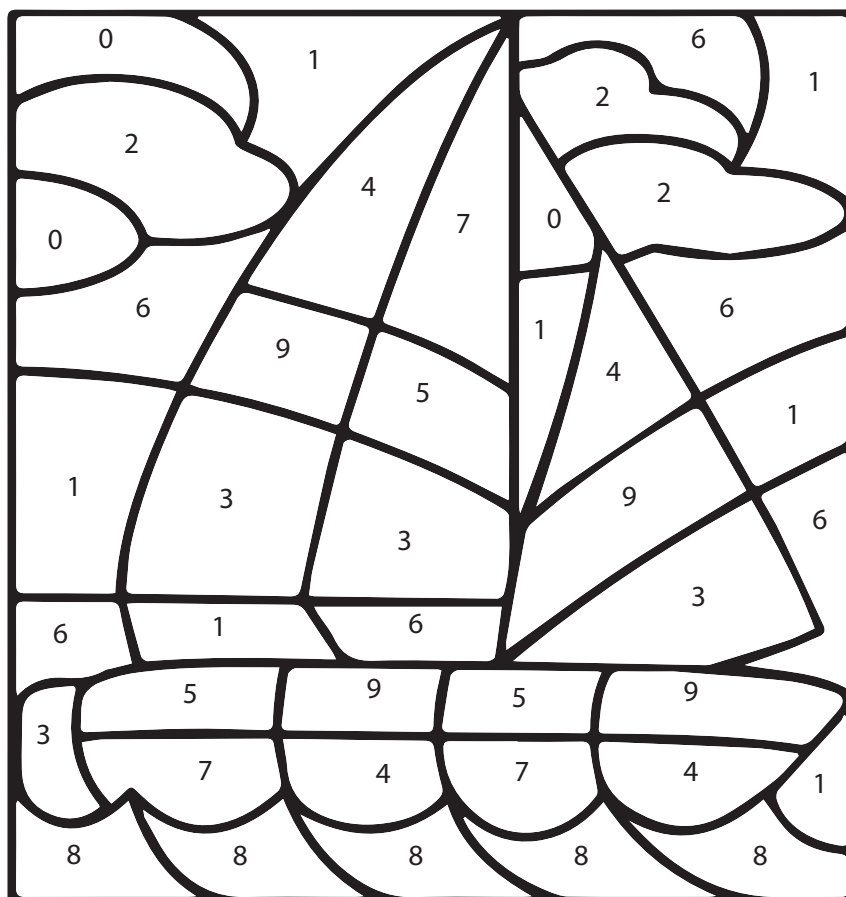
1. When were you born? [exp 9]
2. How do you feel today? [exp 10]

Say and write numbers 1 through 20. [int 6]

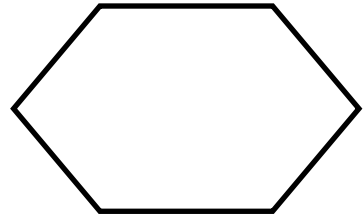
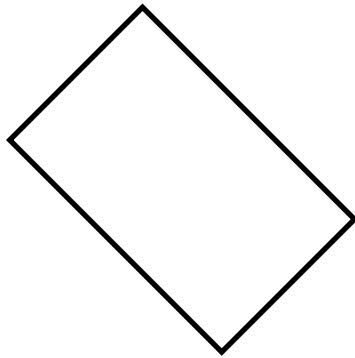

1									
									20

Color the picture according to the key. [fin 8]


- 0, 2 Grey
- 4, 7 Red
- 5, 9 Yellow
- 3 Green
- 8 Blue
- 1, 6 Light Blue



Divide the shapes in half. [int 8]



Draw 3 triangles, 2 circles, and a square. [fin 9]



Copy the numbers and words below. [fin 12]

12

32

29

54

33

83

57

46

51

19

computer

teacher

learning

Erase one word you have written above and rewrite it. [fin 7]

Answer the following questions. [int 3]

1. What color is the sky?
2. What color is grass?
3. What colors are cows?
4. What three colors are traffic lights?

Solve the equations. [int 9]

$7 + 3 = \underline{\hspace{2cm}}$

$9 - 1 = \underline{\hspace{2cm}}$

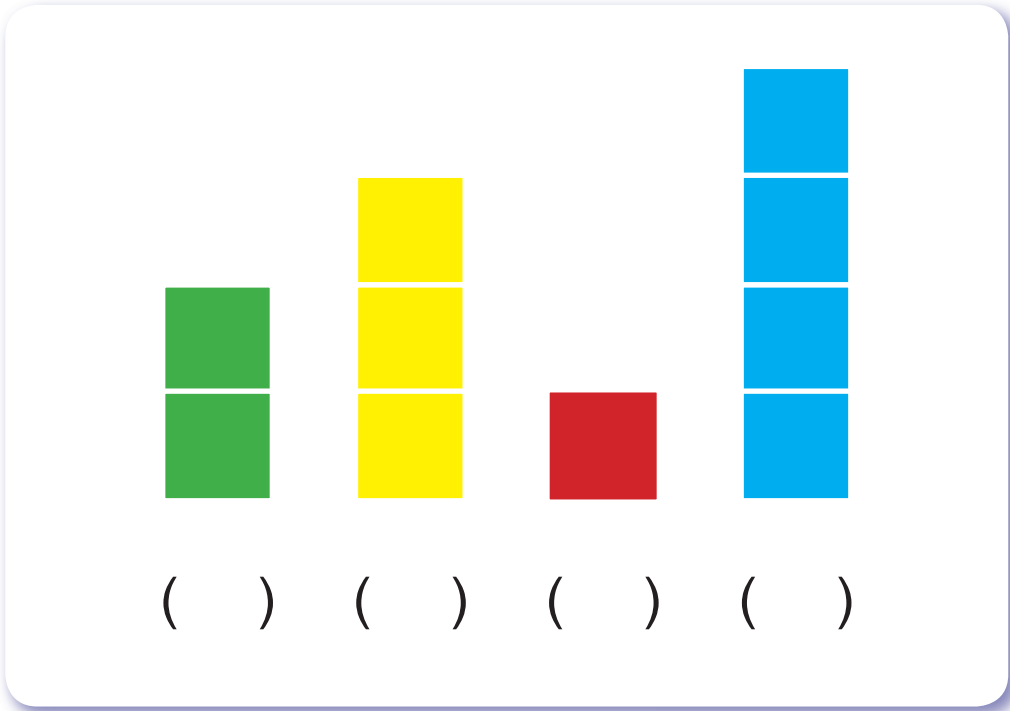
$9 + 6 = \underline{\hspace{2cm}}$

$7 - 2 = \underline{\hspace{2cm}}$








$5 + 3 = \underline{\hspace{2cm}}$

$8 - 3 = \underline{\hspace{2cm}}$

Label by height from shortest (1) to tallest (4). [int 1]



Six people are waiting at a bus stop. Which position in line are each of them in (1st, 2nd etc.)? [int 7]



\_\_\_\_\_ Scientist

\_\_\_\_\_ Chef

\_\_\_\_\_ Firefighter

\_\_\_\_\_ Doctor

\_\_\_\_\_ Police Officer

\_\_\_\_\_ Farmer

Listen to the teacher read the following numbers. Repeat the numbers back to the teacher. [int 10]

4 9 3 7 1 8 5

Answer the following questions.

1. What is the date today? [int 11]
2. Look at a clock or watch and tell the time. [int 12]
3. What did you do yesterday? What have you done today? What will you do tomorrow? [exp 1] [com 1]
4. Tell me what summer is like. Winter? Spring? Fall? [exp 8]

Match the images to the correct terms. [int 13]



A



B



C



D

highway

( )

valley

( )

cafe

( )

flat

( )

Draw a lines to match the opposite terms. [com 2]

in

out

far

top

bottom

near

enter

end

start

leave

Describe the image below. [exp 7]



What is happening in this picture? [int 4] [exp 2]



Listen to the story then summarize in your own words. [int 5] [com 3]

### *Bell The Cat*

There was a grocery shop in a town. Plenty of mice lived in that grocery shop. Food was in plenty for them. They ate everything and spoiled all the bags. They also wasted the bread, biscuits and fruits of the shop.

The grocer got really worried. So, he thought “I should buy a cat and let it stay at the grocery. Only then I can save my things.”

He bought a nice, big fat cat and let him stay there. The cat had a nice time hunting the mice and killing them. The mice could not move freely now. They were afraid that anytime the cat would eat them up.


The mice wanted to do something. They held a meeting and all of them tweeted “We must get rid of the cat. Can someone give a suggestion”?

All the mice sat and brooded. A smart looking mouse stood up and said, “The cat moves softly. That is the problem. If we can tie a bell around her neck, then things will be fine. We can know the movements of the cat”.

“Yes, that is answer,” stated all the mice. An old mouse slowly stood up and asked, “Who would tie the bell?” After some moments there was no one there to answer this question.



Cut out this outline of an elephant. [fin 11]



## WAN CHAI

灣仔軒尼詩道245-251號守時商業大廈2樓B室 (港鐵灣仔站A2出口)

Unit 2B, 2/F, 245-251 Hennessy Road, Success Comm Bldg, Wan Chai, Hong Kong  
(MTR Exit A2)

TEL: 2833 6728

## KOWLOON

旺角西洋菜南街168號168大廈503-504室

Room 503-504, 168 Building, 168 Sai Yeung Choi Street South, Mong Kok, Kowloon,  
Hong Kong

TEL: 2380 1699

## KOWLOON CITY

九龍城太子道西352號薈學坊3樓C (百佳樓上)

Unit 3C, Smart A, 348-352 Prince Edward Road West, Kowloon City, Kowloon

TEL: 2383 0300

[www.me-english.com.hk](http://www.me-english.com.hk)